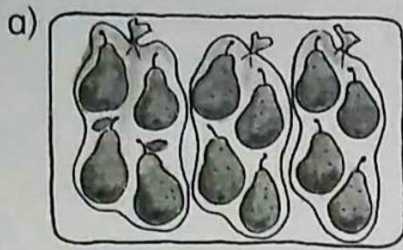



1 Wie viele Tüten werden gebraucht? Teile auf.



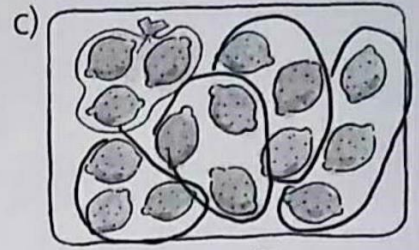
$$12 : 4 = 3$$

3 Tüten



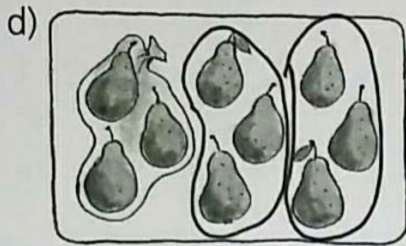
$$15 : 5 = 3$$

3 Tüten




$$15 : 3 = 5$$

3 Tüten



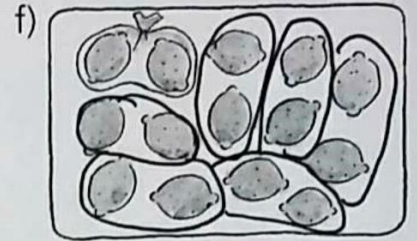
$$9 : 3 = 3$$

3 Tüten



$$16 : 4 = 4$$

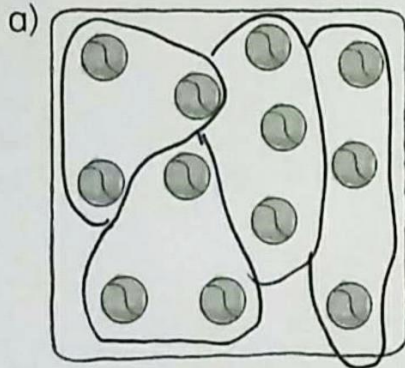
4 Tüten



$$14 : 2 = 7$$

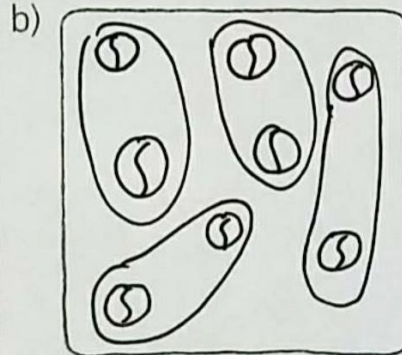
7 Tüten

2 Wie viele Netze werden gebraucht? Zeichne Bälle und teile auf.



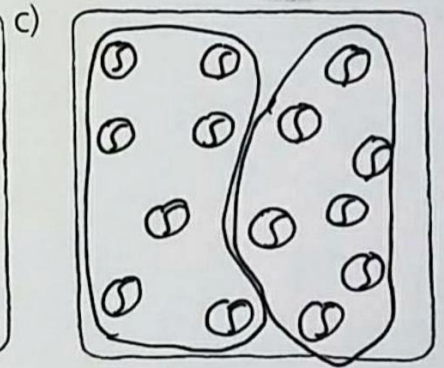
$$12 : 3 = 4$$

4 Netze



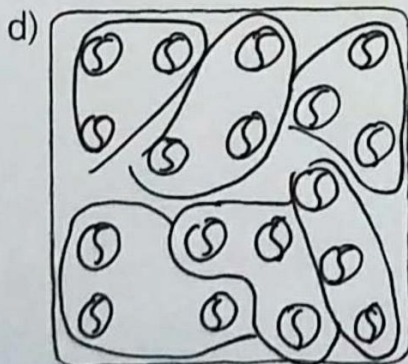
$$8 : 2 = 4$$

4 Netze



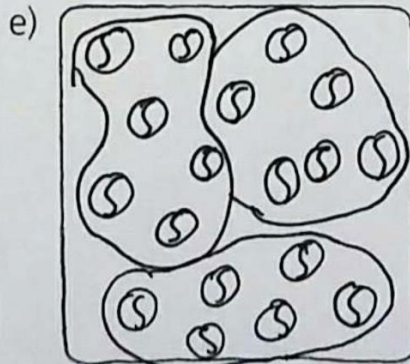
$$14 : 7 = 2$$

2 Netze



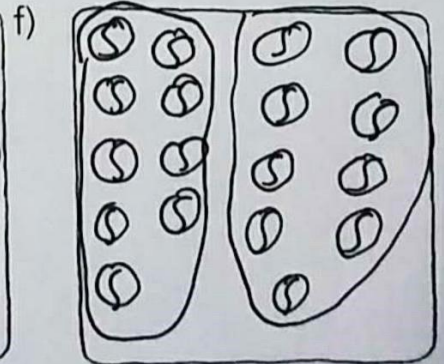
$$18 : 3 = 6$$

6 Netze



$$18 : 6 = 3$$

3 Netze



$$18 : 9 = 2$$

2 Netze