


Verschiedene Darstellungen in Punktebilder übertragen



- 1 Zeichne zu jedem Bild ein Punktebild.
Schreibe die Plusaufgabe und die Malaufgabe dazu.

a)





$$4 + 4 + 4 = 12$$


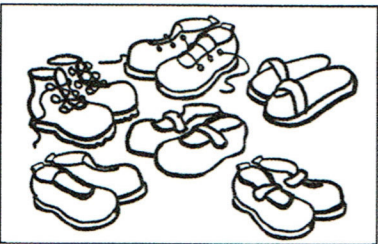
b)




c)



d)



e)



f)

